



## Mental Math Worksheet

Grade - II



NUMBER →	10	26	70	25	83
Add 7					
Take away 0 from					
10 more than the given number					
Remove 1					
Subtract 5					

- Write the numeral nineteen.

- What year is it now?

- Circle the shape that does not belong.



- How many group of 2 in the given picture ?




- What day is it today if yesterday was Monday?

- Write the number that comes before thirty.

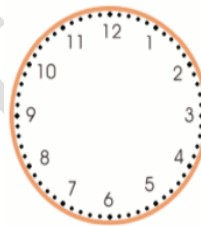
- How many fishes did uncle John catch altogether if he had 5 in his bucket and 4 in his net. Draw in the given box.




- Draw minute and hour hand when you perform following activities.



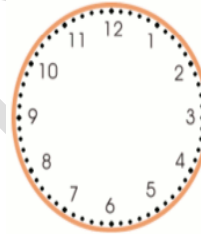
I wake up at  
-----



I go to school at  
-----



I have my dinner at  
-----



I go to bed at  
-----

- How much Raman have to for given items .



a) For  and  =

For  and  =